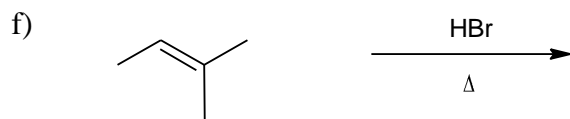
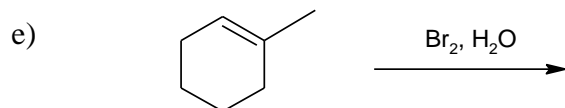

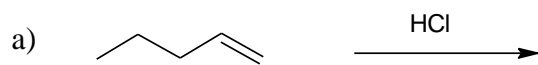


1) What is the major product of the following reactions? Remember to show stereochemistry where applicable.



2) How will you synthesize the following alkyl halides using alkenes or alkynes?

