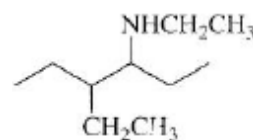
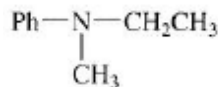
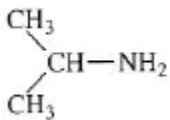
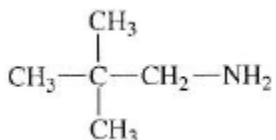
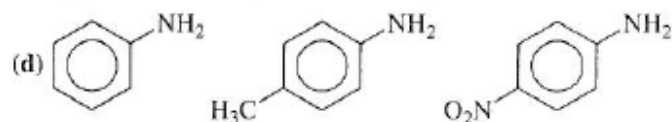
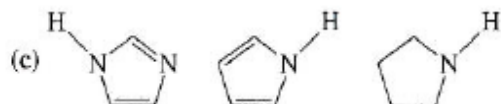
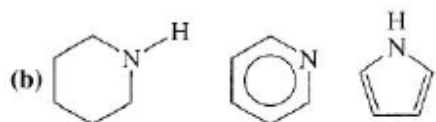
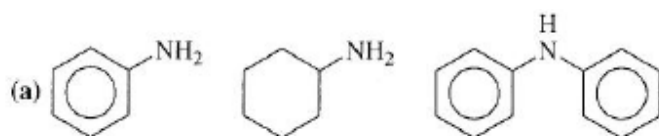


- 1) Classify the following amines as primary, secondary, tertiary or quaternary. Give the names for as many of the compounds you can.



- 2) Which of the following amines is the strongest and lowest basicity.



- 3) Write the products for the following acid-base reactions.

